




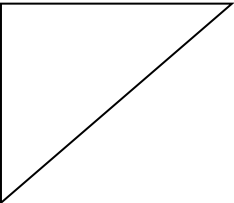
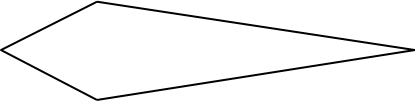

Name _____

Polygon Test

Date _____

*Provide a definition and 2 different examples for each type of polygon

<p>Rhombus _____</p> <p>_____</p> <p>.</p> <p>.</p> <p>.</p> <p>.</p> <p>.</p> <p>.</p>	<p>Square: _____</p> <p>_____</p> <p>.</p> <p>.</p> <p>.</p> <p>.</p> <p>.</p> <p>.</p>
<p>Isosceles Triangle: _____</p> <p>_____</p> <p>.</p> <p>.</p> <p>.</p> <p>.</p> <p>.</p> <p>.</p>	<p>Parallelogram _____</p> <p>_____</p> <p>.</p> <p>.</p> <p>.</p> <p>.</p> <p>.</p> <p>.</p>
<p>Scalene Triangle _____</p> <p>_____</p> <p>.</p> <p>.</p> <p>.</p> <p>.</p> <p>.</p> <p>.</p>	<p>Pentagon _____</p> <p>_____</p> <p>.</p> <p>.</p> <p>.</p> <p>.</p> <p>.</p> <p>.</p>
<p>Trapezoid _____</p> <p>_____</p> <p>.</p> <p>.</p> <p>.</p> <p>.</p> <p>.</p> <p>.</p>	<p>Kite _____</p> <p>_____</p> <p>.</p> <p>.</p> <p>.</p> <p>.</p> <p>.</p> <p>.</p>

Provide all possible names for each polygon below	Have Fun!
 <p>1) _____</p> <p>2) _____</p>	 <p>1) _____</p> <p>2) _____</p>
 <p>All sides equal</p> <p>All angles equal</p> <p>1) _____</p> <p>2) _____</p> <p>3) _____</p>	 <p>1) _____</p> <p>2) _____</p>
 <p>1) _____</p> <p>2) _____</p>	 <p>1) _____</p> <p>2) _____</p>

*Provide the best name for the polygon below and then create 1 different example of the same type of polygon

